

2 times table

Name: _____




Exercise 1:

Draw a line connecting the multiplication expression with the correct product.

7×2	20	
4×2		10
3×2	4	
2×2		6
12×2	22	
10×2		24
11×2	12	
1×2		2
6×2	14	
5×2		8

Exercise 2:

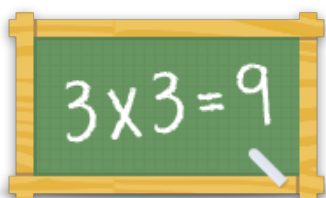
Fill in the missing number.

- a)  $\times 2 = 14$ b)  $\times 2 = 18$ c)  $\times 2 = 12$

Exercise 3:

Fill in the correct product.

- a) $5 \times 2 = \underline{\quad}$ b) $4 \times 2 = \underline{\quad}$ c) $8 \times 2 = \underline{\quad}$
d) $12 \times 2 = \underline{\quad}$ e) $7 \times 2 = \underline{\quad}$ f) $1 \times 2 = \underline{\quad}$



For more worksheets, games and exercises:
www.timestables.co.uk